

ADVANCED SUBSIDIARY GCE

BIOLOGY

Cells, Exchange and Transport

F211

Candidates answer on the question paper.

OCR supplied materials:

- Insert (inserted)

Other materials required:

- Electronic calculator
- Ruler (cm/mm)

Tuesday 11 January 2011
Morning

Duration: 1 hour




Candidate forename		Candidate surname	
-----------------------	--	----------------------	--

Centre number						Candidate number				
---------------	--	--	--	--	--	------------------	--	--	--	--

INSTRUCTIONS TO CANDIDATES

- The insert will be found in the centre of this document.
- Write your name, centre number and candidate number in the boxes above. Please write clearly and in capital letters.
- Use black ink. Pencil may be used for graphs and diagrams only.
- Read each question carefully. Make sure you know what you have to do before starting your answer.
- Write your answer to each question in the space provided. If additional space is required, you should use the lined pages at the end of this booklet. The question number(s) must be clearly shown.
- Answer **all** the questions.
- Do **not** write in the bar codes.

INFORMATION FOR CANDIDATES

- The number of marks is given in brackets [] at the end of each question or part question.
- The total number of marks for this paper is **60**.
-  Where you see this icon you will be awarded marks for the quality of written communication in your answer.
- You may use an electronic calculator.
- You are advised to show all the steps in any calculations.
- This document consists of **16** pages. Any blank pages are indicated.

2

Answer **all** the questions.

- 1 (a) Name the type of nuclear division that produces two genetically identical nuclei.

..... [1]

- (b) There are a number of stages during cell division.

The list, **J** to **N**, describes some processes that occur during the division of an animal cell.

J	the cell surface membrane is constricted
K	the nuclear envelope reforms
L	sister chromatids are pulled apart
M	the chromosomes condense
N	the chromosomes move to the equator

Match each letter, **J** to **N**, with a stage of cell division in the list below.

The first one has been completed for you.

prophase **M**

metaphase

anaphase

telophase

cytokinesis

[4]

- (c) During interphase the genetic material is copied.

State **two** other processes that occur during interphase.

.....

 [2]

3

(d) Suggest **two** ways that cell division in plants differs from cell division in animals.

.....

.....

.....

.....

.....

.....

..... [2]

[Total: 9]

2 Fig. 2.1 shows a drawing of a part of the lung.

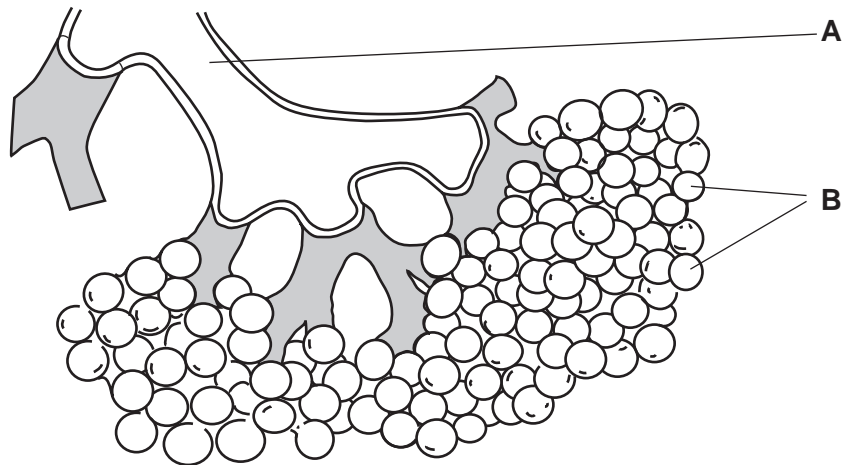


Fig. 2.1

(a) Name the structures labelled **A** and **B**.

A

B

[2]

(b) State **two** features of the structures labelled **B** that enable efficient gaseous exchange.

.....

.....

.....

..... [2]

5

(c) As part of an allergic response, certain cells in the lungs release histamine.

Histamine is a cell signalling molecule that stimulates smooth muscle in the wall of structure **A** to contract.

Suggest how histamine stimulates smooth muscle contraction.

.....

.....

.....

.....

.....

.....

.....

.....

.....

..... [2]

(d) Another action of histamine is to make capillary walls more permeable.

Suggest **two** effects this increased permeability may have on the surrounding tissues.

.....

.....

.....

.....

.....

.....

.....

.....

.....

..... [2]

[Total: 8]

6

BLANK PAGE

PLEASE DO NOT WRITE ON THIS PAGE

7

- 3 Read the following passage and complete each sentence by writing the most appropriate **term or phrase** in the spaces provided.

Large, active organisms need a circulatory system because they have a small

.....

Haemoglobin is a pigment found in red blood cells. These cells are also known as

..... Haemoglobin has a high for oxygen. In the

lungs, the haemoglobin associates with oxygen to form

In respiring tissues, the oxygen is released by dissociation. In very active tissues, the amount of

oxygen released can be increased by the presence of more

This is called the effect.

[6]

[Total: 6]

- 4 (a) Fig. 4.1 is a diagram showing the position of the vascular bundles in a transverse section of the stem of a young dicotyledonous plant.

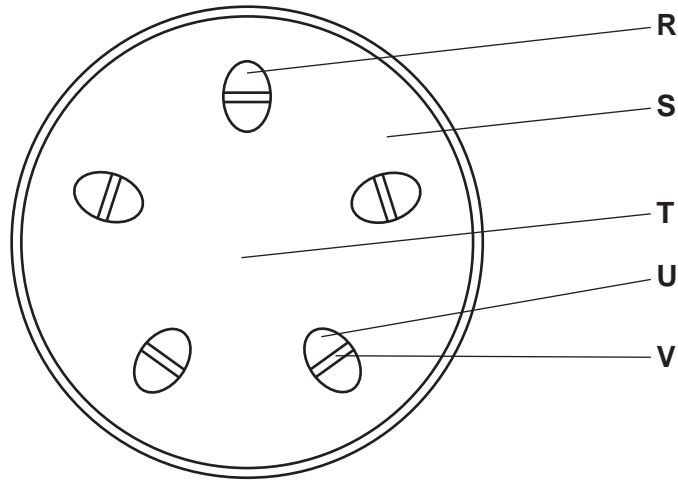


Fig. 4.1

Select the correct letter from Fig. 4.1 to identify each of the following tissues in the stem.

xylem

phloem

cambium

[3]

- (b) Fig. 4.2, **on the insert**, shows the cut end of a stem from a woody plant. The other end of the stem is being heated in a fire. Steam can be seen coming from the vascular tissue at the cut end of the stem.

Describe the features of the xylem that enable the steam to pass from the heated end of the stem to the cut end.

.....

.....

.....

.....

.....

..... [2]

5 (a) Fig. 5.1 is provided for you **on the insert**.

(i) State **two** features of the cell shown in Fig. 5.1 that indicate it is eukaryotic.

.....
.....
.....
..... [2]

(ii) The line **A–B** on Fig. 5.1 represents 20 μm.

Calculate the magnification of the cell shown in Fig. 5.1.

Show your working.

Answer = x [2]

(iii) Microtubules and microfilaments are part of the cytoskeleton.

Suggest **two** roles of the cytoskeleton in the type of cell shown in Fig. 5.1.

.....
.....
.....
.....
..... [2]

(b) The cells of a multicellular organism are usually specialised to perform a particular function.

(i) Name the process in which a cell becomes specialised.

..... [1]

12

6 (a) (i) Name the process by which water leaves a cell.

..... [1]

(ii) Describe the routes that water molecules take through the **cell surface membrane**.

.....

 [2]

A student carried out an investigation to determine the effects of different sucrose concentrations on cells from pieces of onion epidermis.

- Strips of epidermis were taken from an onion.
- Separate pieces of epidermis were placed into water and a range of sucrose solutions.
- The pieces of epidermis were left for 30 minutes before being removed.
- The pieces of epidermis were then viewed at high power under the microscope.

The student counted 100 cells from each piece of epidermis. The student noted how many cells had become plasmolysed.

The results are shown in Table 6.1.

Table 6.1

concentration of sucrose solution (mol dm^{-3})	water potential of sucrose solution (kPa)	percentage of cells plasmolysed (%)
0.0	0	0
0.1	-260	0
0.3	-860	3
0.4	-1120	7
0.5	-1450	39
0.6	-1800	57
0.7	-2180	83
0.8	-2580	94
1.0	-3500	100

(b) None of the onion epidermis cells this student observed had burst when left in pure water.

Explain why plant cells do not burst when they are left in pure water.

.....
.....
..... [2]

(c) (i) The water potential of the onion epidermis cells can be assumed to be the same as the water potential of a solution that causes 50% plasmolysis.

Use the information in Table 6.1 to **estimate the water potential** inside these onion epidermis cells.

..... [1]

(ii) Suggest how the student could construct and use a graph to obtain a better estimate of the water potential.

.....
.....
.....
.....
..... [2]

(d) Suggest how the student could modify the procedure to make the results more reliable and accurate.

reliable

.....
.....
.....

accurate

.....
.....
.....
..... [4]

[Total: 12]

ADDITIONAL PAGE

Dotted lines for writing.

PLEASE DO NOT WRITE ON THIS PAGE



Copyright Information

OCR is committed to seeking permission to reproduce all third-party content that it uses in its assessment materials. OCR has attempted to identify and contact all copyright holders whose work is used in this paper. To avoid the issue of disclosure of answer-related information to candidates, all copyright acknowledgements are reproduced in the OCR Copyright Acknowledgements Booklet. This is produced for each series of examinations and is freely available to download from our public website (www.ocr.org.uk) after the live examination series.

If OCR has unwittingly failed to correctly acknowledge or clear any third-party content in this assessment material, OCR will be happy to correct its mistake at the earliest possible opportunity.

For queries or further information please contact the Copyright Team, First Floor, 9 Hills Road, Cambridge CB2 1GE.

OCR is part of the Cambridge Assessment Group; Cambridge Assessment is the brand name of University of Cambridge Local Examinations Syndicate (UCLES), which is itself a department of the University of Cambridge.